



Name : _____

Class : _____


Instruction: // Calculate the area of the following shapes:

5 cm



3 cm

Area = _____ cm²

4 cm

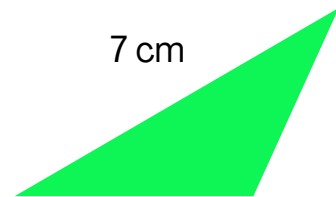


4 cm

Area = _____ cm²


6 cm

6 cm

Area = _____ cm²


7 cm

4 cm

5 cm

Area = _____ cm²


2 cm

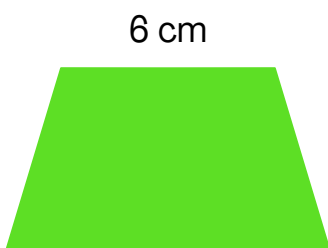
9 cm

Area = _____ cm²


3 cm

4 cm

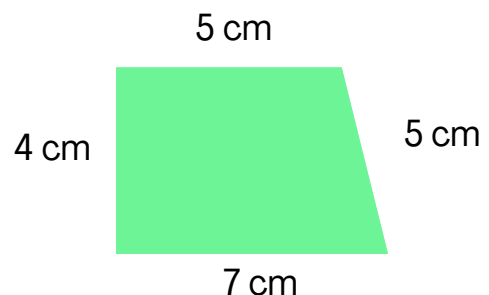
7 cm

Area = _____ cm²


6 cm

4 cm

8 cm

Area = _____ cm²


5 cm

4 cm

5 cm

7 cm

Area = _____ cm²