



Name : \_\_\_\_\_

Class : \_\_\_\_\_


**Instruction: // Use the pictographs to answer each question.**





















How many kinds of balloons were sold?

How many more heart balloons were sold than clown balloons?

How many total balloons were sold on Saturday?























Which kind of balloon did most people buy on Saturday?

**Ballons Sold at the Zoo on Saturday**

Clown	   
Heart	    
Bear	 
Elephant	  
Monkey	     

 = 2 balloons

**Number of Children Who Saw Zoo Animals on Saturday**

Elephant	    
Lion	     
Monkey	   
Tiger	  
Zebra	   

 = 10 children


How many kinds of animals did the children see?

Which animal did the greatest number of children see?

How many more children saw monkeys than zebras?

How many more children saw elephants than zebras?