



Name : _____

Class : _____



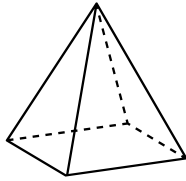
Instruction: // Label the 3D shapes and write the properties of each in the table below:

Name: _____

Faces: _____

Edges: _____

Vertices: _____

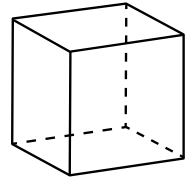


Name: _____

Faces: _____

Edges: _____

Vertices: _____

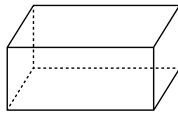


Name: _____

Faces: _____

Edges: _____

Vertices: _____

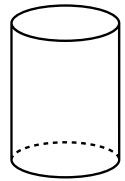


Name: _____

Faces: _____

Edges: _____

Vertices: _____

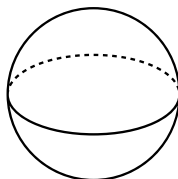


Name: _____

Faces: _____

Edges: _____

Vertices: _____



Name: _____

Faces: _____

Edges: _____

Vertices: _____

